



Time: 10 Minutes	Paper Math 3	Total Marks: 10
-------------------------	---------------------	------------------------


6th Month, 1st Week, 1st Day	Syllabus: Unit 6. Exercise # 1. Q # 1.
------------------------------	---

Q.1. Identify point, line, line segment and ray. (10)

نقطہ، خط، قطعہ خط اور شعاع کی نشان دہی کریں۔








Y






X


Time: 10 Minutes	Paper Math 3	Total Marks: 10
-------------------------	---------------------	------------------------


6th Month, 1st Week, 1st Day	Syllabus: Unit 6. Exercise # 1. Q # 1.
------------------------------	---

Q.1. Identify point, line, line segment and ray. (10)

نقطہ، خط، قطعہ خط اور شعاع کی نشان دہی کریں۔







Y
